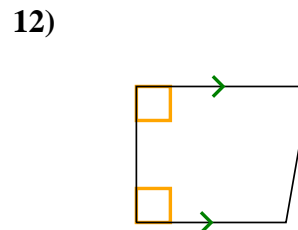
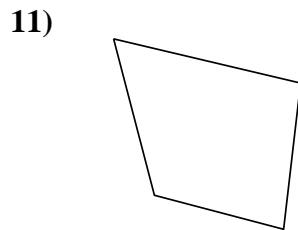
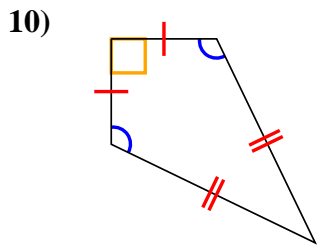
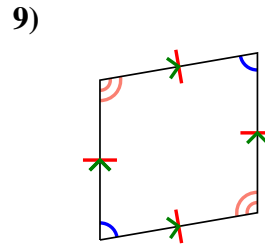
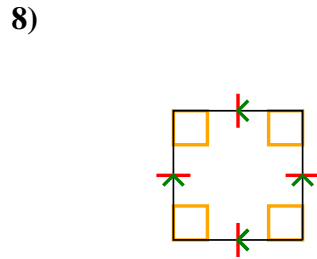
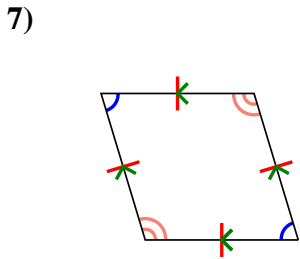
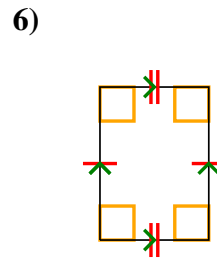
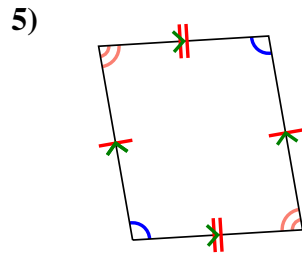
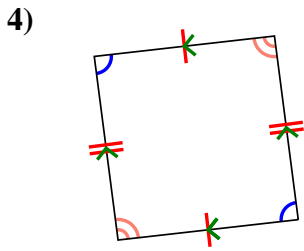
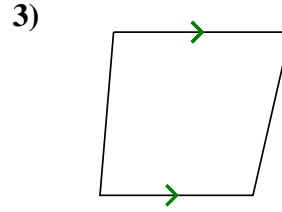
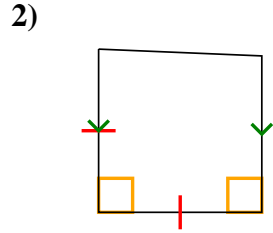
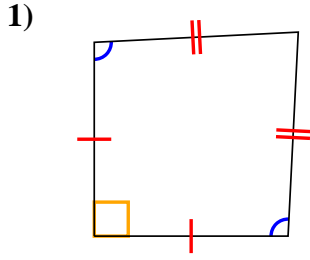




Determine if the shape shown is a Quadrilateral, Kite, Trapezoid, Parallelogram, Rhombus, Rectangle or Square (can be more than one).

Answers

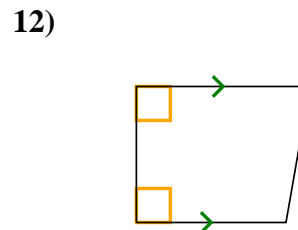
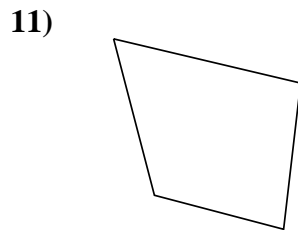
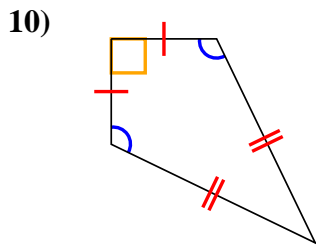
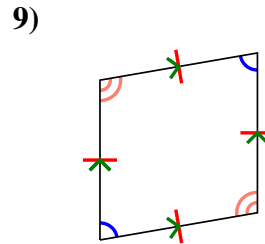
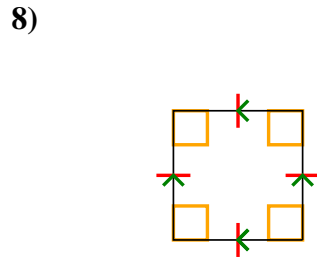
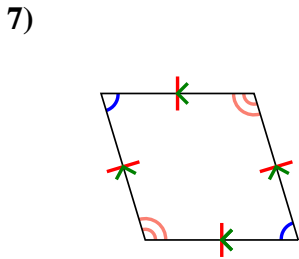
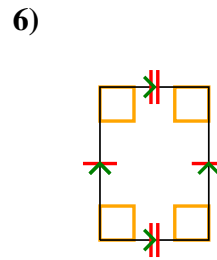
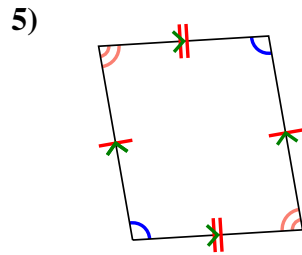
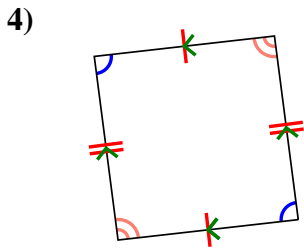
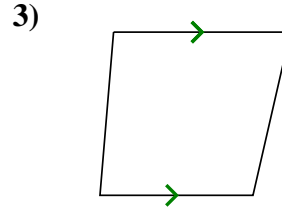
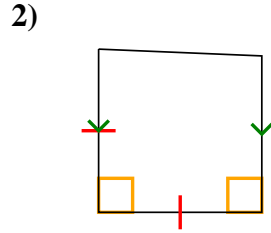
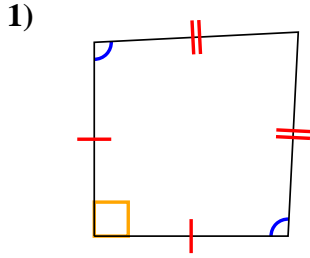


1. _____
2. _____
3. _____
4. _____
5. _____
6. _____
7. _____
8. _____
9. _____
10. _____
11. _____
12. _____



Determine if the shape shown is a Quadrilateral, Kite, Trapezoid, Parallelogram, Rhombus, Rectangle or Square (can be more than one).

Answers



- 1. Q,K
- 2. Q,T
- 3. Q,T
- 4. Q,P
- 5. Q,P
- 6. Q,P,R
- 7. Q,P,H
- 8. Q,P,H,R,S
- 9. Q,P,H
- 10. Q,K
- 11. Q
- 12. Q,T